




Geography Skills Activity 31

River Systems in Russia and the Eurasian Republics

with Chapter 14.


Use the following information to fill in the bar graph below.

- Yenisei River: 2,800 miles (4,056 kilometers)
- Amur River: 2,704 miles (4,352 kilometers)
- Dnieper River: 1,419 miles (2,284 kilometers)
- Volga River: 2,291 miles (3,687 kilometers)
- Lena River: 2,652 miles (4,268 kilometers)



Use the bar graph above to decide whether each of the following statements is true or false. Write T for true or F for false in the blank at the left.

- _____ 1. According to the bar graph, the longest river is the Amur River.
- _____ 2. The shortest river shown on the graph is the Dnieper River.
- _____ 3. The Yenisei River is about 2,500 miles (4,023 kilometers) long.
- _____ 4. The Lena River is longer than the Volga River, but shorter than the Amur River.




Geography Skills Activity 32


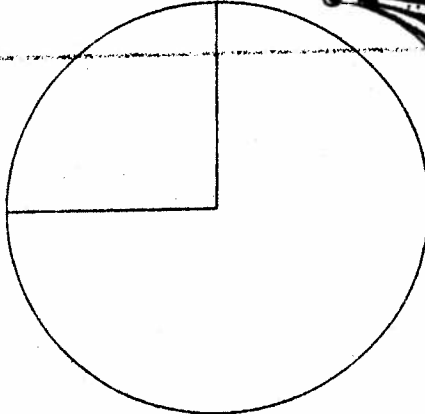
A Profile of Russia

Use with Chapter 15.



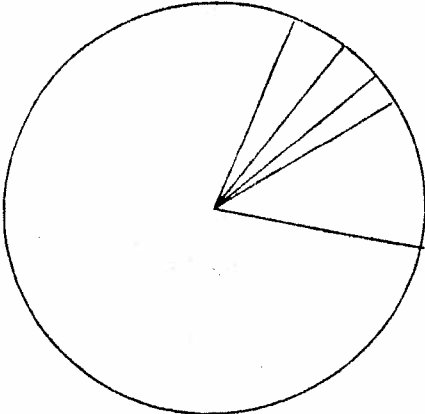
Use the following information to fill in each of the circle graphs below.



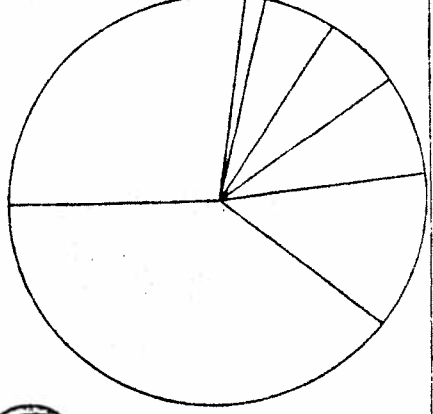
Source: Population Reference Bureau, Inc.



Source: Britannica World Data, 1983



Source: Britannica World Data, 1983



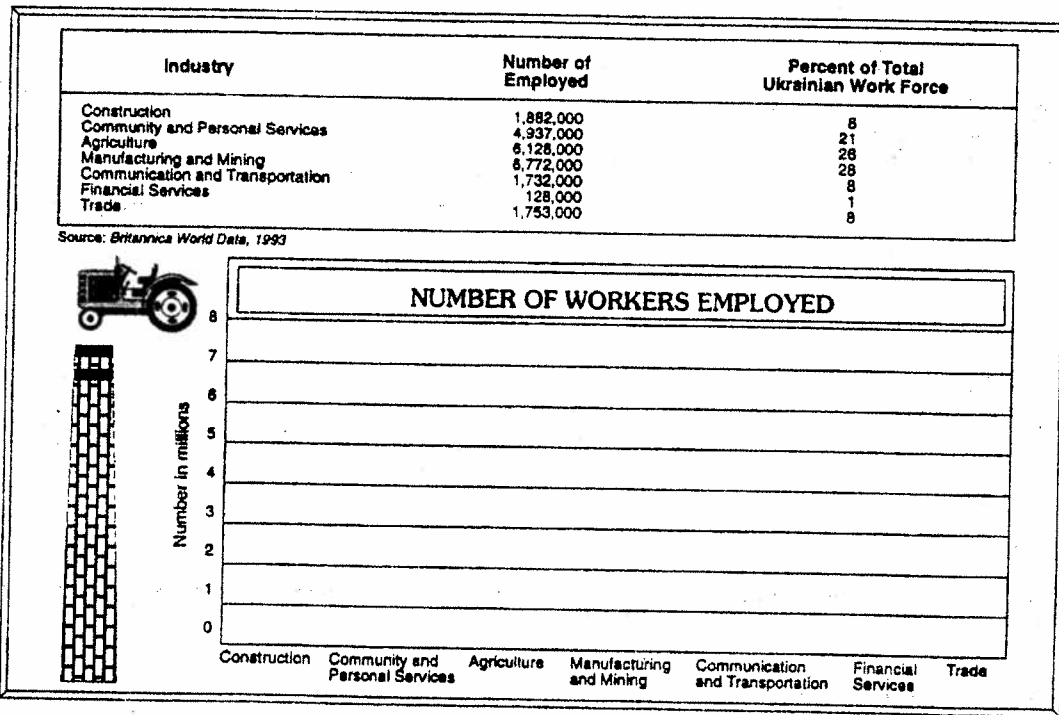


Geography Skills Activity 33

The Ukrainian Labor Force

Use with Chapter 16.

- The table below shows the number of workers employed in selected industries in Ukraine during a recent year. The table also shows the percent of Ukraine's total workforce that is employed in each of the industries. Use the information in the table to complete the bar graph below. Then use the table and the completed graph to decide whether each of the statements that follows is true or false. Write *T* for true or *F* for false in the blank at the left.



Copyright © by the Glencoe/McGraw-Hill School Publishing Company

- _____ 1. The bar graph shows that more Ukrainian workers are employed in manufacturing and mining than in community and personal services.
- _____ 2. The bar graph shows that agriculture employs the largest number of Ukrainian workers.
- _____ 3. The bar graph shows that the number of Ukrainian workers employed in financial services has increased in recent years.
- _____ 4. According to the table, the number of Ukrainian workers employed in community and personal services is more than twice as great as the number of Ukrainian workers employed in construction and in communication and transportation combined.
- _____ 5. The table shows that trade in Ukraine has increased by about 8 percent in recent years.